




Determine which letter best represents the weight.

Ounce (oz)

An ounce is about the weight of a slice of bread.



Pound (lb)

A pound is about the weight of a can of vegetables.

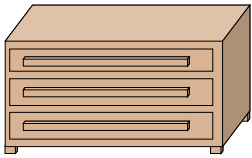


Remember:

There are 16 ounces in 1 pound.

Answers


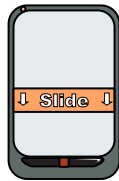

1. _____
2. _____
3. _____
4. _____
5. _____
6. _____
7. _____
8. _____
9. _____



- 1) Dresser
- A. 150 pounds
 - B. 30 pounds
 - C. 10 ounces
 - D. 3,000 ounces

- 2) Big Screen TV
- A. 40 pounds
 - B. 2,000 pounds
 - C. 1.25 ounces
 - D. 160 ounces


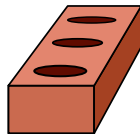
- 3) Pen
- A. 16 ounces
 - B. 10 pounds
 - C. 0.2 ounces
 - D. 18 ounces



- 4) Lollipop
- A. 10 pounds
 - B. 0.7 ounces
 - C. 44 pounds
 - D. 7 ounces

- 5) Phone
- A. 0.2 ounces
 - B. 10 pounds
 - C. 1 pound
 - D. 5 pounds

- 6) Recliner
- A. 70 pounds
 - B. 3 ounces
 - C. 2 pounds
 - D. 5 ounces



- 7) Spoon
- A. 10 pounds
 - B. 0.11 ounces
 - C. 7 pounds
 - D. 0.8 ounces

- 8) Brick
- A. 15 ounces
 - B. 4 pounds
 - C. 100 pounds
 - D. 5 ounces


- 9) Notebook Paper
- A. 10 ounces
 - B. 2 pounds
 - C. 3 ounces
 - D. 0.1 ounces



Determine which letter best represents the weight.

Ounce (oz)

An ounce is about the weight of a slice of bread.



Pound (lb)

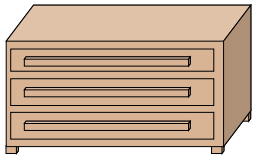
A pound is about the weight of a can of vegetables.



Remember:
There are 16 ounces in 1 pound.

Answers



1. **A**
2. **A**
3. **C**
4. **B**
5. **C**
6. **A**
7. **D**
8. **B**
9. **D**



- 1) Dresser
- A. 150 pounds
 - B. 30 pounds
 - C. 10 ounces
 - D. 3,000 ounces

- 2) Big Screen TV
- A. 40 pounds
 - B. 2,000 pounds
 - C. 1.25 ounces
 - D. 160 ounces


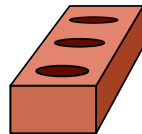
- 3) Pen
- A. 16 ounces
 - B. 10 pounds
 - C. 0.2 ounces
 - D. 18 ounces



- 4) Lollipop
- A. 10 pounds
 - B. 0.7 ounces
 - C. 44 pounds
 - D. 7 ounces

- 5) Phone
- A. 0.2 ounces
 - B. 10 pounds
 - C. 1 pound
 - D. 5 pounds

- 6) Recliner
- A. 70 pounds
 - B. 3 ounces
 - C. 2 pounds
 - D. 5 ounces



- 7) Spoon
- A. 10 pounds
 - B. 0.11 ounces
 - C. 7 pounds
 - D. 0.8 ounces

- 8) Brick
- A. 15 ounces
 - B. 4 pounds
 - C. 100 pounds
 - D. 5 ounces


- 9) Notebook Paper
- A. 10 ounces
 - B. 2 pounds
 - C. 3 ounces
 - D. 0.1 ounces



Determine which letter best represents the weight.

Ounce (oz)

An ounce is about the weight of a slice of bread.



Pound (lb)

A pound is about the weight of a can of vegetables.




Remember:

There are 16 ounces in 1 pound.

Answers

1. _____
2. _____
3. _____
4. _____
5. _____
6. _____
7. _____
8. _____
9. _____



1) Notebook Paper


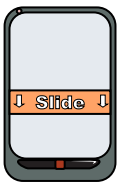
2) Pencil

3) Bicycle

- A. 0.1 ounces
- B. 10 ounces
- C. 2 pounds
- D. 3 ounces

- A. 1 ounce
- B. 44 pounds
- C. 2 pounds
- D. 0.01 ounces

- A. 4 ounces
- B. 0.53 ounces
- C. 220 pounds
- D. 30 pounds



4) Phone



5) Lawn Mower

6) Frog

- A. 0.2 ounces
- B. 10 pounds
- C. 5 pounds
- D. 1 pound

- A. 100 ounces
- B. 200 ounces
- C. 50 pounds
- D. 200 pounds

- A. 11,000 pounds
- B. 2 pounds
- C. 17 ounces
- D. 2 ounces



7) Skateboard

8) Glue Stick

9) Car

- A. 7 ounces
- B. 4 pounds
- C. 33 pounds
- D. 0.71 ounces

- A. 2 pounds
- B. 1 pound
- C. 2.2 ounces
- D. 15 ounces


- A. 15 ounces
- B. 500 pounds
- C. 5,200 ounces
- D. 2,000 pounds



Determine which letter best represents the weight.

Ounce (oz)

An ounce is about the weight of a slice of bread.



Pound (lb)


A pound is about the weight of a can of vegetables.



Remember:
There are 16 ounces in 1 pound.

Answers


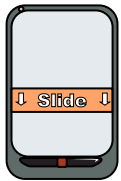
- 1. **A**
- 2. **A**
- 3. **D**
- 4. **D**
- 5. **C**
- 6. **D**
- 7. **B**
- 8. **C**
- 9. **D**



- 1) Notebook Paper
- A. 0.1 ounces
 - B. 10 ounces
 - C. 2 pounds
 - D. 3 ounces

- 2) Pencil
- A. 1 ounce
 - B. 44 pounds
 - C. 2 pounds
 - D. 0.01 ounces



- 3) Bicycle
- A. 4 ounces
 - B. 0.53 ounces
 - C. 220 pounds
 - D. 30 pounds



- 4) Phone
- A. 0.2 ounces
 - B. 10 pounds
 - C. 5 pounds
 - D. 1 pound

- 5) Lawn Mower
- A. 100 ounces
 - B. 200 ounces
 - C. 50 pounds
 - D. 200 pounds

- 6) Frog
- A. 11,000 pounds
 - B. 2 pounds
 - C. 17 ounces
 - D. 2 ounces



- 7) Skateboard
- A. 7 ounces
 - B. 4 pounds
 - C. 33 pounds
 - D. 0.71 ounces

- 8) Glue Stick
- A. 2 pounds
 - B. 1 pound
 - C. 2.2 ounces
 - D. 15 ounces


- 9) Car
- A. 15 ounces
 - B. 500 pounds
 - C. 5,200 ounces
 - D. 2,000 pounds



Determine which letter best represents the weight.

Ounce (oz)

An ounce is about the weight of a slice of bread.



Pound (lb)

A pound is about the weight of a can of vegetables.



Remember:

There are 16 ounces in 1 pound.

Answers


1. _____
2. _____
3. _____
4. _____
5. _____
6. _____
7. _____
8. _____
9. _____



- 1) Wrist Watch
- A. 12 pounds
 - B. 16 ounces
 - C. 2 pounds
 - D. 3 ounce



- 2) Pen
- A. 0.2 ounces
 - B. 18 ounces
 - C. 10 pounds
 - D. 16 ounces



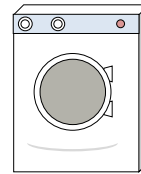
- 3) Can of Soda
- A. 0.04 ounces
 - B. 4 pounds
 - C. 100 pounds
 - D. 9 ounces



- 4) Shovel
- A. 80 pounds
 - B. 0.1 ounces
 - C. 0.4 ounces
 - D. 8 pounds




- 5) DVD
- A. 16 ounces
 - B. 2.5 pounds
 - C. 0.6 ounce
 - D. 1 pound



- 6) Washing Machine
- A. 3 tons
 - B. 0.200 ounces
 - C. 165 pounds
 - D. 16 pounds



- 7) Tennis Ball
- A. 0.01 ounces
 - B. 2 pounds
 - C. 2 ounces
 - D. 30 pounds



- 8) Adult Horse
- A. 1 ounce
 - B. 100 pounds
 - C. 14 ounces
 - D. 900 pounds




- 9) Strawberry
- A. 0.5 ounces
 - B. 1 pound
 - C. 11 ounces
 - D. 0.5 pounds



Determine which letter best represents the weight.

Ounce (oz)

An ounce is about the weight of a slice of bread.



Pound (lb)

A pound is about the weight of a can of vegetables.



Remember:
There are 16 ounces in 1 pound.

Answers



- 1) Wrist Watch
- A. 12 pounds
- B. 16 ounces
- C. 2 pounds
- D. 3 ounce




- 2) Pen
- A. 0.2 ounces
- B. 18 ounces
- C. 10 pounds
- D. 16 ounces



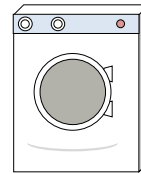
- 3) Can of Soda
- A. 0.04 ounces
- B. 4 pounds
- C. 100 pounds
- D. 9 ounces



- 4) Shovel
- A. 80 pounds
- B. 0.1 ounces
- C. 0.4 ounces
- D. 8 pounds




- 5) DVD
- A. 16 ounces
- B. 2.5 pounds
- C. 0.6 ounce
- D. 1 pound



- 6) Washing Machine
- A. 3 tons
- B. 0.200 ounces
- C. 165 pounds
- D. 16 pounds



- 7) Tennis Ball
- A. 0.01 ounces
- B. 2 pounds
- C. 2 ounces
- D. 30 pounds



- 8) Adult Horse
- A. 1 ounce
- B. 100 pounds
- C. 14 ounces
- D. 900 pounds



- 9) Strawberry
- A. 0.5 ounces
- B. 1 pound
- C. 11 ounces
- D. 0.5 pounds


- 1. **D**
- 2. **A**
- 3. **D**
- 4. **D**
- 5. **C**
- 6. **C**
- 7. **C**
- 8. **D**
- 9. **A**



Determine which letter best represents the weight.

Ounce (oz)

An ounce is about the weight of a slice of bread.



Pound (lb)

A pound is about the weight of a can of vegetables.



Remember:


There are 16 ounces in 1 pound.

Answers


1. _____
2. _____
3. _____
4. _____
5. _____
6. _____
7. _____
8. _____
9. _____



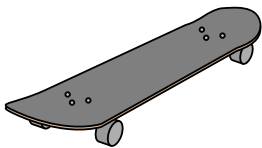
- 1) Big Screen TV
- A. 40 pounds
 - B. 2,000 pounds
 - C. 1.25 ounces
 - D. 160 ounces



- 2) Notebook Paper
- A. 3 ounces
 - B. 2 pounds
 - C. 10 ounces
 - D. 0.1 ounces



- 3) Elephant
- A. 4,000 ounces
 - B. 15 ounces
 - C. 300 pounds
 - D. 11,000 pounds




- 4) Skateboard
- A. 0.71 ounces
 - B. 7 ounces
 - C. 33 pounds
 - D. 4 pounds



- 5) Dog
- A. 600 pounds
 - B. 1 ounce
 - C. 2.5 ounces
 - D. 55 pounds




- 6) 2 Liter of Soda
- A. 0.11 ounces
 - B. 4 pounds
 - C. 4 ounces
 - D. 2 ounces



- 7) Washing Machine
- A. 3 tons
 - B. 0.200 ounces
 - C. 16 pounds
 - D. 165 pounds



- 8) Glue Stick
- A. 2 pounds
 - B. 15 ounces
 - C. 1 pound
 - D. 2.2 ounces




- 9) Lollipop
- A. 7 ounces
 - B. 0.7 ounces
 - C. 44 pounds
 - D. 10 pounds



Determine which letter best represents the weight.

Ounce (oz)

An ounce is about the weight of a slice of bread.



Pound (lb)

A pound is about the weight of a can of vegetables.




Remember:
There are 16 ounces in 1 pound.


Answers



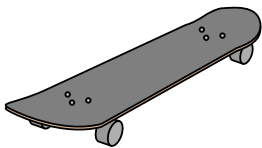
- 1) Big Screen TV
 - A. 40 pounds
 - B. 2,000 pounds
 - C. 1.25 ounces
 - D. 160 ounces



- 2) Notebook Paper
 - A. 3 ounces
 - B. 2 pounds
 - C. 10 ounces
 - D. 0.1 ounces



- 3) Elephant
 - A. 4,000 ounces
 - B. 15 ounces
 - C. 300 pounds
 - D. 11,000 pounds




- 4) Skateboard
 - A. 0.71 ounces
 - B. 7 ounces
 - C. 33 pounds
 - D. 4 pounds



- 5) Dog
 - A. 600 pounds
 - B. 1 ounce
 - C. 2.5 ounces
 - D. 55 pounds




- 6) 2 Liter of Soda
 - A. 0.11 ounces
 - B. 4 pounds
 - C. 4 ounces
 - D. 2 ounces



- 7) Washing Machine
 - A. 3 tons
 - B. 0.200 ounces
 - C. 16 pounds
 - D. 165 pounds



- 8) Glue Stick
 - A. 2 pounds
 - B. 15 ounces
 - C. 1 pound
 - D. 2.2 ounces



- 9) Lollipop
 - A. 7 ounces
 - B. 0.7 ounces
 - C. 44 pounds
 - D. 10 pounds


- 1. **A**
- 2. **D**
- 3. **D**
- 4. **D**
- 5. **D**
- 6. **B**
- 7. **D**
- 8. **D**
- 9. **B**



Determine which letter best represents the weight.

Ounce (oz)

An ounce is about the weight of a slice of bread.



Pound (lb)

A pound is about the weight of a can of vegetables.




Remember:
There are 16 ounces in 1 pound.

Answers

1. _____
2. _____
3. _____
4. _____
5. _____
6. _____
7. _____
8. _____
9. _____



- 1) Nail
- A. 16 ounces
 - B. 7 pounds
 - C. 0.10 ounces
 - D. 4 pounds




- 2) Apple
- A. 5 pounds
 - B. 7 ounces
 - C. 10 pounds
 - D. 0.1 ounces



- 3) Candle
- A. 20 pounds
 - B. 0.2 ounces
 - C. 1 pound
 - D. 16 ounces



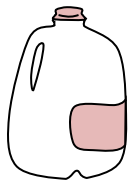
- 4) Popcorn
- A. 10 ounces
 - B. 0.3 pounds
 - C. 0.04 ounces
 - D. 2 pounds



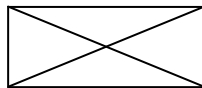
- 5) Battery
- A. 100 pounds
 - B. 0.5 ounces
 - C. 20 pounds
 - D. 10 ounces



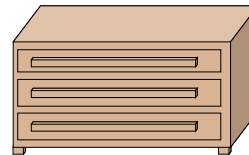
- 6) Stove
- A. 160 ounces
 - B. 16 ounces
 - C. 30 pounds
 - D. 130 pounds



- 7) Gallon of Milk
- A. 6 pounds
 - B. 6 ounces
 - C. 0.6 ounces
 - D. 60 pounds



- 8) Envelope
- A. 1 ounce
 - B. 440 pounds
 - C. 24 ounces
 - D. 11 pounds




- 9) Dresser
- A. 150 pounds
 - B. 3,000 ounces
 - C. 30 pounds
 - D. 10 ounces



Determine which letter best represents the weight.

Ounce (oz)

An ounce is about the weight of a slice of bread.



Pound (lb)

A pound is about the weight of a can of vegetables.




Remember:

There are 16 ounces in 1 pound.

Answers



- 1) Nail
 - A. 16 ounces
 - B. 7 pounds
 - C. 0.10 ounces
 - D. 4 pounds



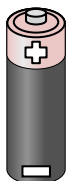
- 2) Apple
 - A. 5 pounds
 - B. 7 ounces
 - C. 10 pounds
 - D. 0.1 ounces



- 3) Candle
 - A. 20 pounds
 - B. 0.2 ounces
 - C. 1 pound
 - D. 16 ounces



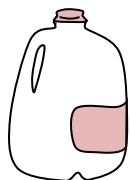
- 4) Popcorn
 - A. 10 ounces
 - B. 0.3 pounds
 - C. 0.04 ounces
 - D. 2 pounds



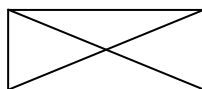
- 5) Battery
 - A. 100 pounds
 - B. 0.5 ounces
 - C. 20 pounds
 - D. 10 ounces



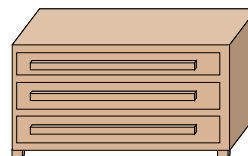
- 6) Stove
 - A. 160 ounces
 - B. 16 ounces
 - C. 30 pounds
 - D. 130 pounds



- 7) Gallon of Milk
 - A. 6 pounds
 - B. 6 ounces
 - C. 0.6 ounces
 - D. 60 pounds



- 8) Envelope
 - A. 1 ounce
 - B. 440 pounds
 - C. 24 ounces
 - D. 11 pounds



- 9) Dresser
 - A. 150 pounds
 - B. 3,000 ounces
 - C. 30 pounds
 - D. 10 ounces


- 1. **C**
- 2. **B**
- 3. **B**
- 4. **C**
- 5. **B**
- 6. **D**
- 7. **A**
- 8. **A**
- 9. **A**



Determine which letter best represents the weight.

Ounce (oz)

An ounce is about the weight of a slice of bread.



Pound (lb)

A pound is about the weight of a can of vegetables.


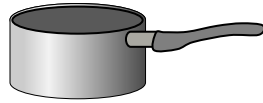



Remember:

There are 16 ounces in 1 pound.

Answers


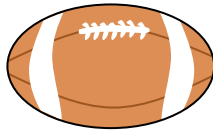
1. _____
2. _____
3. _____
4. _____
5. _____
6. _____
7. _____
8. _____
9. _____



- 1) Beetle
- A. 4 pounds
 - B. 0.04 ounces
 - C. 8 ounces
 - D. 16 ounces

- 2) Cooking Pot
- A. 1.7 ounces
 - B. 0.01 ounces
 - C. 4 pounds
 - D. 5 ounces


- 3) Skateboard
- A. 7 ounces
 - B. 4 pounds
 - C. 0.71 ounces
 - D. 33 pounds



- 4) Stove
- A. 30 pounds
 - B. 16 ounces
 - C. 160 ounces
 - D. 130 pounds

- 5) Football
- A. 13 pounds
 - B. 1 pound
 - C. 65 pounds
 - D. 0.9 ounces

- 6) Screw
- A. 10 ounces
 - B. 2 pounds
 - C. 0.04 ounces
 - D. 1 pound



- 7) Broom
- A. 2 pounds
 - B. 20 pounds
 - C. 4 ounces
 - D. 440 pounds

- 8) Elephant
- A. 11,000 pounds
 - B. 4,000 ounces
 - C. 300 pounds
 - D. 15 ounces


- 9) Phone
- A. 5 pounds
 - B. 1 pound
 - C. 0.2 ounces
 - D. 10 pounds



Determine which letter best represents the weight.

Ounce (oz)

An ounce is about the weight of a slice of bread.



Pound (lb)

A pound is about the weight of a can of vegetables.




Remember:

There are 16 ounces in 1 pound.

Answers

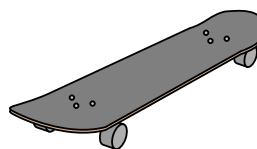
1. **B**
2. **C**
3. **B**
4. **D**
5. **B**
6. **C**
7. **A**
8. **A**
9. **B**



- 1) Beetle
- A. 4 pounds
 - B. 0.04 ounces
 - C. 8 ounces
 - D. 16 ounces



- 2) Cooking Pot
- A. 1.7 ounces
 - B. 0.01 ounces
 - C. 4 pounds
 - D. 5 ounces




- 3) Skateboard
- A. 7 ounces
 - B. 4 pounds
 - C. 0.71 ounces
 - D. 33 pounds



- 4) Stove
- A. 30 pounds
 - B. 16 ounces
 - C. 160 ounces
 - D. 130 pounds




- 5) Football
- A. 13 pounds
 - B. 1 pound
 - C. 65 pounds
 - D. 0.9 ounces



- 6) Screw
- A. 10 ounces
 - B. 2 pounds
 - C. 0.04 ounces
 - D. 1 pound



- 7) Broom
- A. 2 pounds
 - B. 20 pounds
 - C. 4 ounces
 - D. 440 pounds



- 8) Elephant
- A. 11,000 pounds
 - B. 4,000 ounces
 - C. 300 pounds
 - D. 15 ounces




- 9) Phone
- A. 5 pounds
 - B. 1 pound
 - C. 0.2 ounces
 - D. 10 pounds



Determine which letter best represents the weight.

Ounce (oz)

An ounce is about the weight of a slice of bread.



Pound (lb)

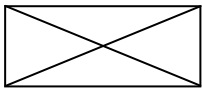
A pound is about the weight of a can of vegetables.



Remember:
There are 16 ounces in 1 pound.

Answers


1. _____
2. _____
3. _____
4. _____
5. _____
6. _____
7. _____
8. _____
9. _____



- 1) Envelope
- A. 24 ounces
 - B. 1 ounce
 - C. 440 pounds
 - D. 11 pounds



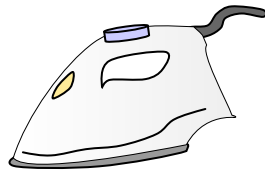
- 2) Gallon of Milk
- A. 60 pounds
 - B. 0.6 ounces
 - C. 6 ounces
 - D. 6 pounds



- 3) Pear
- A. 0.07 ounces
 - B. 4 pounds
 - C. 550 pounds
 - D. 6 ounces



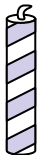
- 4) Glue Stick
- A. 2.2 ounces
 - B. 15 ounces
 - C. 1 pound
 - D. 2 pounds



- 5) Clothes Iron
- A. 5 pounds
 - B. 0.53 ounces
 - C. 30 pounds
 - D. 4 ounces



- 6) Flash Drive
- A. 19 pounds
 - B. 1 ounce
 - C. 10 ounces
 - D. 20 pounds



- 7) Candle
- A. 16 ounces
 - B. 0.2 ounces
 - C. 20 pounds
 - D. 1 pound



- 8) Big Screen TV
- A. 160 ounces
 - B. 2,000 pounds
 - C. 1.25 ounces
 - D. 40 pounds




- 9) Wrist Watch
- A. 16 ounces
 - B. 2 pounds
 - C. 3 ounce
 - D. 12 pounds



Determine which letter best represents the weight.

Ounce (oz)

An ounce is about the weight of a slice of bread.



Pound (lb)

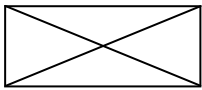
A pound is about the weight of a can of vegetables.



Remember:
There are 16 ounces in 1 pound.

Answers


1. **B**
2. **D**
3. **D**
4. **A**
5. **A**
6. **B**
7. **B**
8. **D**
9. **C**



- 1) Envelope
- A. 24 ounces
 - B. 1 ounce
 - C. 440 pounds
 - D. 11 pounds



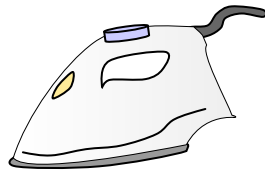
- 2) Gallon of Milk
- A. 60 pounds
 - B. 0.6 ounces
 - C. 6 ounces
 - D. 6 pounds



- 3) Pear
- A. 0.07 ounces
 - B. 4 pounds
 - C. 550 pounds
 - D. 6 ounces



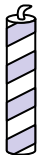
- 4) Glue Stick
- A. 2.2 ounces
 - B. 15 ounces
 - C. 1 pound
 - D. 2 pounds



- 5) Clothes Iron
- A. 5 pounds
 - B. 0.53 ounces
 - C. 30 pounds
 - D. 4 ounces



- 6) Flash Drive
- A. 19 pounds
 - B. 1 ounce
 - C. 10 ounces
 - D. 20 pounds



- 7) Candle
- A. 16 ounces
 - B. 0.2 ounces
 - C. 20 pounds
 - D. 1 pound



- 8) Big Screen TV
- A. 160 ounces
 - B. 2,000 pounds
 - C. 1.25 ounces
 - D. 40 pounds




- 9) Wrist Watch
- A. 16 ounces
 - B. 2 pounds
 - C. 3 ounce
 - D. 12 pounds



Determine which letter best represents the weight.

Ounce (oz)

An ounce is about the weight of a slice of bread.



Pound (lb)

A pound is about the weight of a can of vegetables.




Remember:
There are 16 ounces in 1 pound.

Answers

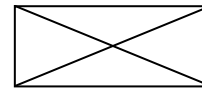
1. _____
2. _____
3. _____
4. _____
5. _____
6. _____
7. _____
8. _____
9. _____



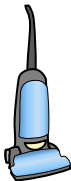
- 1) Flash Drive
- A. 19 pounds
 - B. 1 ounce
 - C. 10 ounces
 - D. 20 pounds



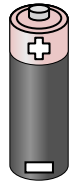
- 2) DVD
- A. 0.6 ounce
 - B. 16 ounces
 - C. 2.5 pounds
 - D. 1 pound



- 3) Envelope
- A. 1 ounce
 - B. 24 ounces
 - C. 11 pounds
 - D. 440 pounds



- 4) Vacuum
- A. 35 pounds
 - B. 2 ounces
 - C. 3 ounces
 - D. 1,100 pounds



- 5) Battery
- A. 10 ounces
 - B. 20 pounds
 - C. 0.5 ounces
 - D. 100 pounds



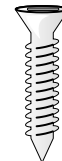
- 6) Football
- A. 0.9 ounces
 - B. 65 pounds
 - C. 13 pounds
 - D. 1 pound



- 7) Frog
- A. 2 pounds
 - B. 2 ounces
 - C. 17 ounces
 - D. 11,000 pounds



- 8) Popcorn
- A. 0.3 pounds
 - B. 10 ounces
 - C. 0.04 ounces
 - D. 2 pounds




- 9) Screw
- A. 2 pounds
 - B. 10 ounces
 - C. 0.04 ounces
 - D. 1 pound



Determine which letter best represents the weight.

Ounce (oz)

An ounce is about the weight of a slice of bread.



Pound (lb)

A pound is about the weight of a can of vegetables.




Remember:
There are 16 ounces in 1 pound.

Answers

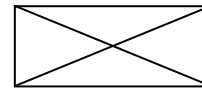
- 1. **B**
- 2. **A**
- 3. **A**
- 4. **A**
- 5. **C**
- 6. **D**
- 7. **B**
- 8. **C**
- 9. **C**



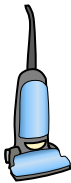
- 1) Flash Drive
- A. 19 pounds
 - B. 1 ounce
 - C. 10 ounces
 - D. 20 pounds



- 2) DVD
- A. 0.6 ounce
 - B. 16 ounces
 - C. 2.5 pounds
 - D. 1 pound



- 3) Envelope
- A. 1 ounce
 - B. 24 ounces
 - C. 11 pounds
 - D. 440 pounds



- 4) Vacuum
- A. 35 pounds
 - B. 2 ounces
 - C. 3 ounces
 - D. 1,100 pounds



- 5) Battery
- A. 10 ounces
 - B. 20 pounds
 - C. 0.5 ounces
 - D. 100 pounds



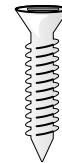
- 6) Football
- A. 0.9 ounces
 - B. 65 pounds
 - C. 13 pounds
 - D. 1 pound



- 7) Frog
- A. 2 pounds
 - B. 2 ounces
 - C. 17 ounces
 - D. 11,000 pounds



- 8) Popcorn
- A. 0.3 pounds
 - B. 10 ounces
 - C. 0.04 ounces
 - D. 2 pounds




- 9) Screw
- A. 2 pounds
 - B. 10 ounces
 - C. 0.04 ounces
 - D. 1 pound



Determine which letter best represents the weight.

Ounce (oz)

An ounce is about the weight of a slice of bread.



Pound (lb)

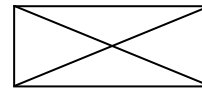

A pound is about the weight of a can of vegetables.



Remember:
There are 16 ounces in 1 pound.

Answers


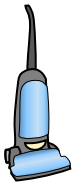
1. _____
2. _____
3. _____
4. _____
5. _____
6. _____
7. _____
8. _____
9. _____



- 1) 2 Liter of Soda
- A. 0.11 ounces
 - B. 2 ounces
 - C. 4 ounces
 - D. 4 pounds

- 2) Pencil
- A. 2 pounds
 - B. 1 ounce
 - C. 44 pounds
 - D. 0.01 ounces



- 3) Envelope
- A. 24 ounces
 - B. 440 pounds
 - C. 1 ounce
 - D. 11 pounds



- 4) Vacuum
- A. 1,100 pounds
 - B. 2 ounces
 - C. 35 pounds
 - D. 3 ounces

- 5) Lollipop
- A. 10 pounds
 - B. 44 pounds
 - C. 7 ounces
 - D. 0.7 ounces

- 6) Broom
- A. 2 pounds
 - B. 440 pounds
 - C. 20 pounds
 - D. 4 ounces



- 7) Stove
- A. 16 ounces
 - B. 160 ounces
 - C. 30 pounds
 - D. 130 pounds

- 8) Pear
- A. 550 pounds
 - B. 4 pounds
 - C. 6 ounces
 - D. 0.07 ounces


- 9) Car
- A. 5,200 ounces
 - B. 2,000 pounds
 - C. 15 ounces
 - D. 500 pounds



Determine which letter best represents the weight.

Ounce (oz)

An ounce is about the weight of a slice of bread.



Pound (lb)

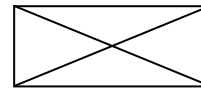

A pound is about the weight of a can of vegetables.



Remember:
There are 16 ounces in 1 pound.

Answers


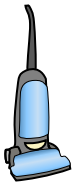
1. **D**
2. **B**
3. **C**
4. **C**
5. **D**
6. **A**
7. **D**
8. **C**
9. **B**



- 1) 2 Liter of Soda
- A. 0.11 ounces
 - B. 2 ounces
 - C. 4 ounces
 - D. 4 pounds

- 2) Pencil
- A. 2 pounds
 - B. 1 ounce
 - C. 44 pounds
 - D. 0.01 ounces



- 3) Envelope
- A. 24 ounces
 - B. 440 pounds
 - C. 1 ounce
 - D. 11 pounds



- 4) Vacuum
- A. 1,100 pounds
 - B. 2 ounces
 - C. 35 pounds
 - D. 3 ounces

- 5) Lollipop
- A. 10 pounds
 - B. 44 pounds
 - C. 7 ounces
 - D. 0.7 ounces

- 6) Broom
- A. 2 pounds
 - B. 440 pounds
 - C. 20 pounds
 - D. 4 ounces



- 7) Stove
- A. 16 ounces
 - B. 160 ounces
 - C. 30 pounds
 - D. 130 pounds

- 8) Pear
- A. 550 pounds
 - B. 4 pounds
 - C. 6 ounces
 - D. 0.07 ounces


- 9) Car
- A. 5,200 ounces
 - B. 2,000 pounds
 - C. 15 ounces
 - D. 500 pounds



Determine which letter best represents the weight.

Ounce (oz)

An ounce is about the weight of a slice of bread.



Pound (lb)

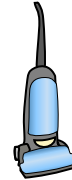
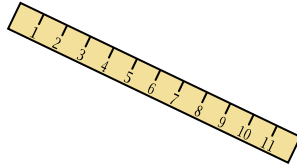
A pound is about the weight of a can of vegetables.



Remember:
There are 16 ounces in 1 pound.

Answers

1. _____
2. _____
3. _____
4. _____
5. _____
6. _____
7. _____
8. _____
9. _____



1) Pencil

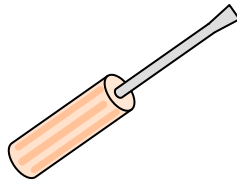
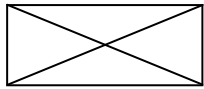
- A. 1 ounce
- B. 44 pounds
- C. 2 pounds
- D. 0.01 ounces

2) Ruler

- A. 1 ounce
- B. 35 ounces
- C. 0.04 ounces
- D. 6 pounds

3) Vacuum

- A. 3 ounces
- B. 1,100 pounds
- C. 35 pounds
- D. 2 ounces



4) Envelope

- A. 440 pounds
- B. 11 pounds
- C. 1 ounce
- D. 24 ounces

5) Screw Driver

- A. 15 ounces
- B. 0.1 ounces
- C. 2 ounces
- D. 29 pounds

6) Broom

- A. 440 pounds
- B. 4 ounces
- C. 20 pounds
- D. 2 pounds



7) Spider

- A. 0.3 pounds
- B. 16 ounces
- C. 0.04 ounces
- D. 4 ounces

8) Gallon of Milk

- A. 0.6 ounces
- B. 60 pounds
- C. 6 ounces
- D. 6 pounds

9) Glue Stick


- A. 2.2 ounces
- B. 2 pounds
- C. 1 pound
- D. 15 ounces



Determine which letter best represents the weight.

Ounce (oz)

An ounce is about the weight of a slice of bread.



Pound (lb)

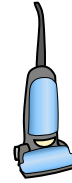
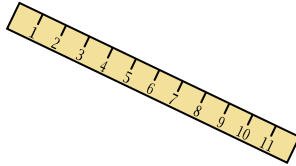
A pound is about the weight of a can of vegetables.



Remember:
There are 16 ounces in 1 pound.

Answers

1. **A**
2. **A**
3. **C**
4. **C**
5. **C**
6. **D**
7. **C**
8. **D**
9. **A**



1) Pencil

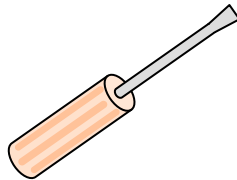
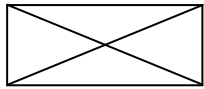
- A. 1 ounce
- B. 44 pounds
- C. 2 pounds
- D. 0.01 ounces

2) Ruler

- A. 1 ounce
- B. 35 ounces
- C. 0.04 ounces
- D. 6 pounds

3) Vacuum

- A. 3 ounces
- B. 1,100 pounds
- C. 35 pounds
- D. 2 ounces



4) Envelope

- A. 440 pounds
- B. 11 pounds
- C. 1 ounce
- D. 24 ounces

5) Screw Driver

- A. 15 ounces
- B. 0.1 ounces
- C. 2 ounces
- D. 29 pounds

6) Broom

- A. 440 pounds
- B. 4 ounces
- C. 20 pounds
- D. 2 pounds



7) Spider

- A. 0.3 pounds
- B. 16 ounces
- C. 0.04 ounces
- D. 4 ounces

8) Gallon of Milk

- A. 0.6 ounces
- B. 60 pounds
- C. 6 ounces
- D. 6 pounds

9) Glue Stick

- A. 2.2 ounces
- B. 2 pounds
- C. 1 pound
- D. 15 ounces